



Choose the Correct Graph

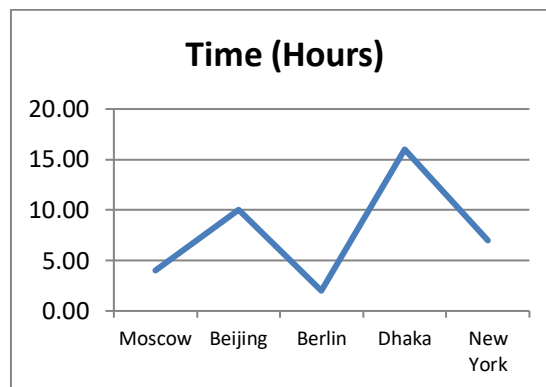
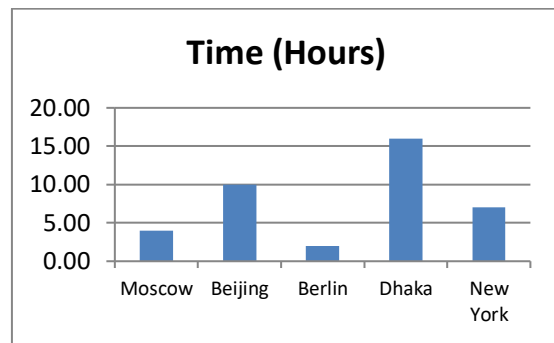
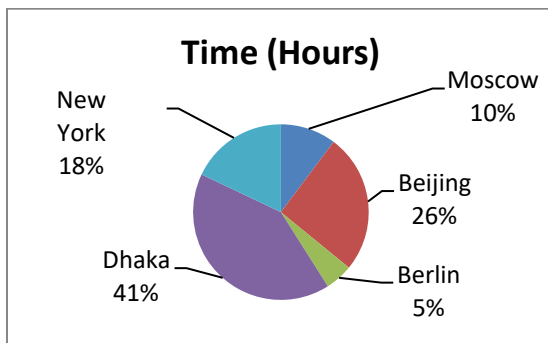
Name: _____

Class: _____

Look at the following table of data showing the flight times from London to different cities around the world.

City	Time (Hours)
Moscow	4.00
Beijing	10.00
Berlin	2.00
Dhaka	16.00
New York	7.00

The data has been shown in three different graphs as shown below:



Write down which one you think is the best type of graph to allow somebody to compare the flight times to the different countries. Explain your answer.